

BUDHA DAL PUBLIC SCHOOL, PATIALA

Session - 2022-23

*Indira dal Kaur  
Prasanna  
Kaur*

Term- 2 SUBJECT: Maths SET-B Time : 2:30 hrs MM 60

ROLL NO: \_\_\_\_\_ NAME: \_\_\_\_\_ CLASS-1 SEC \_\_\_\_\_ Date: 7.3.23

Section - A Very Short Answer Questions 12 M

Fill in the blanks:


1) Which of the following takes less time?



drinking juice




sleeping at night

2) How many  are there? \_\_\_\_\_



3) Circle the heavier person.



4) Which vegetable is the heaviest?



Pumpkin



Chilli



Tomato




Potato



Onion

5) The total number of shoes is \_\_\_\_\_.



6) 700 paise = \_\_\_\_\_ rupee

7) If 33 candies are taken away from 87 candies, \_\_\_\_\_ candies will be left.

8) ₹1 + ₹2 + ₹10 = ₹ \_\_\_\_\_

9) 3 - 1 = \_\_\_\_\_

10) The heaviest object is the \_\_\_\_\_.



Newspaper



handkerchief



jacket



needle

11) The activity in figure \_\_\_\_\_ is done later.



A



B

12) How many rupees are 400 paise

\_\_\_\_\_

**Section - B**

**Multiple Choice Questions**

**15 M**

Choose the correct answer:

13) What is the difference obtained from following subtraction?

$$\begin{array}{r} \text{O} \\ 9 \\ - 7 \\ \hline \end{array}$$

(A) 1

(B) 3

(C) 4

(D) 2

14) How is ₹8.80 read as?


(A) eighty rupees eighty paise

(B) eighty paise eighty rupees

(C) eight rupees eighty paise

(D) eighty paise

- 15) Which of the following comes later?  
(A) brushing teeth (C) going to school  
(B) playing in School (D) taking a bath
- 16) Which of the following takes the most time?  
(A) climbing a hill (C) reading a page  
(B) eating a banana (D) brushing teeth
- 17) Which of the following notes are used in India?  
(A) ₹7 (B) ₹3  
(C) ₹20 (D) ₹17
- 18) How many cubits is the given doormat?



- (A) 2 (B) 3  
(C) 4 (D) 1
- 19) What is the time at 12 night called?  
(A) mid-day (B) morning  
(C) midnight (D) afternoon

20) Choose the smallest shape among the following:



- 21) Handspan, cubit, foot and pace are non standard units  
(A) true (B) False
- 22) A group of objects put together is called a \_\_\_\_\_  
(A) collection (B) data  
(C) information (D) none of these
- 23) The sun rises in the \_\_\_\_\_  
(A) night (B) morning  
(C) evening (D) midnight

- 24) The symbol of subtraction '-' is read as  
(A) number line (B) plus  
(C) minus (D) money

25) Choose the lightest animal among the following.




(B)



(D)



26) The picture given below is a collection of:



(A) a collection of bats

(B) a collection of candles

(C) a collection of balls

(D) a collection of bulbs

27) The early coins were made of \_\_\_\_

(A) gold and silver

(B) bronze and silver

(C) bronze and gold


(D) copper and gold

Section - C

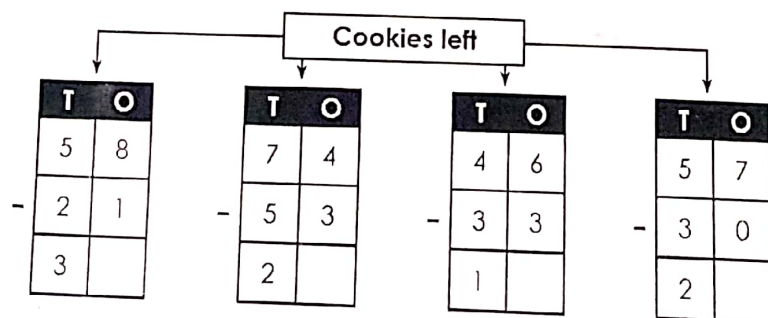
Graphic Organisers

12 M

28) Arrange the objects from the lightest to the heaviest.



29) Some of the cookies were sold. Find the number of cookies left.



30) Riya wants to buy a candy that costs ₹5 and a bottle of juice that costs ₹8. How much money should she have to buy these?

Solution:

Cost of candy = \_\_\_\_\_

Cost of juice bottle = \_\_\_\_\_

Amount Riya should have =

\_\_\_\_\_ + \_\_\_\_\_ = \_\_\_\_\_

Section D

Short Answer Questions

21M

31) Number the following objects from the heaviest to the lightest, where 1 is the lightest and 3 is the heaviest.



32) Number the following objects in order of lightest to the heaviest where 1 is the lightest and 3 is the heaviest.

a)




33) Find the total money: two notes of ₹20 and two coins of ₹5

\_\_\_\_\_ + \_\_\_\_\_ + \_\_\_\_\_ + \_\_\_\_\_ = \_\_\_\_\_

34) Circle the note(s) that can be used to buy a soap that costs ₹20.



35) Subtract 55 from 97 using vertical subtraction.




36) Smita and Rahul have money as shown. How much money does each of them have?

Smita → ₹10   ₹10   ₹10   ₹   ₹ = ₹ \_\_\_\_\_

Rahul → ₹20   ₹10   ₹10   ₹10   ₹   ₹   ₹ = ₹ \_\_\_\_\_

\_\_\_\_\_ has more money

- 37) a) How many squares are there?  
 b) How many circles are there?  
 c) How many rectangles are there?



	_____
	_____
	_____